

NAME: SOLUTIONS

1	/15	2	/15	3	/18	4	/15	5	/12	T	/75
---	-----	---	-----	---	-----	---	-----	---	-----	---	-----

MATH 251 (Spring 2008) Exam 1, Feb 20th

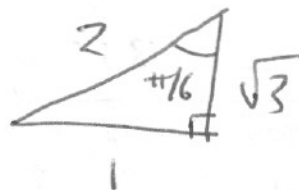
No calculators, books or notes! Show all work and give complete explanations.

This 65 minute exam is worth a total of 75 points.

(1) [15 pts] Let \mathbf{a} and \mathbf{b} be two vectors so that $|\mathbf{a}| = 2$, $|\mathbf{b}| = 5$ and the angle between \mathbf{a} and \mathbf{b} is $\pi/6$.

(a) Find $\mathbf{a} \cdot \mathbf{b}$.

$$\begin{aligned} \mathbf{a} \cdot \mathbf{b} &= |\mathbf{a}| |\mathbf{b}| \cos \theta = 2 \cdot 5 \cos \pi/6 \\ &= 10 \frac{\sqrt{3}}{2} \\ &= 5\sqrt{3} \end{aligned}$$



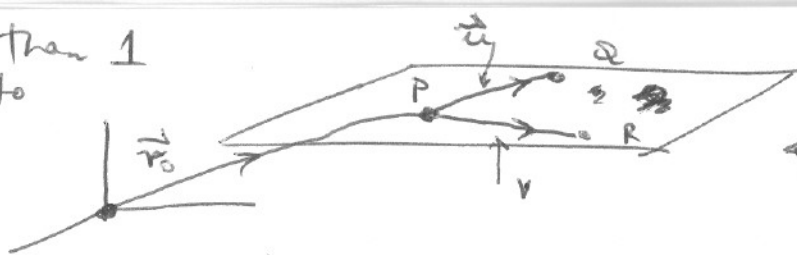
(b) Calculate the scalar projection of \mathbf{b} onto \mathbf{a} .

$$\text{COMP}_{\mathbf{a}}(\mathbf{b}) = \frac{\mathbf{a} \cdot \mathbf{b}}{|\mathbf{a}|} = \frac{5\sqrt{3}}{2} \quad \text{from (a)}$$

(c) Find the area of the parallelogram determined by \mathbf{a} and \mathbf{b} .

$$\begin{aligned} \text{AREA} &= |\mathbf{a} \times \mathbf{b}| \\ &= |\mathbf{a}| |\mathbf{b}| |\sin \theta| \\ &= 2 \cdot 5 |\sin \pi/6| \\ &= 10 \cdot \frac{1}{2} = 5. \end{aligned}$$

There ~~is~~ more than 1 correct answer to (a) and (b)



(2) [15 pts]

(a) Find a parametric equation for the plane through the points $(3, -1, 2)$, $(8, 2, 4)$, and $(-1, -2, -3)$.

$$\vec{P} = (3, -1, 2) \quad \vec{Q} = (8, 2, 4) \quad \vec{R} = (-1, -2, -3)$$

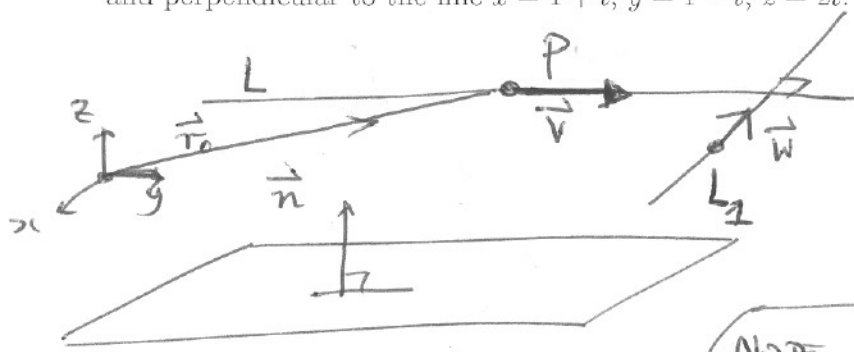
$$\begin{aligned} \vec{u} &= \vec{PQ} = \vec{Q} - \vec{P} = (5, 3, 2) \\ \vec{v} &= \vec{PR} = \vec{R} - \vec{P} = (-4, -1, -5) \end{aligned} \quad \left. \begin{array}{l} \text{These are 2 vectors} \\ \text{in the plane} \end{array} \right\}$$

$\vec{r}_0 = \vec{P} = (3, -1, 2)$ Vector whose endpoint is in the plane

$$\begin{aligned} \vec{r}(s, t) &= \vec{r}_0 + s\vec{u} + t\vec{v} = (3, -1, 2) + s(5, 3, 2) + t(-4, -1, -5) \\ &= (3 + 5s - 4t, -1 + 3s - t, 2 + 2s - 5t) \end{aligned}$$

MANY OF YOU FOUND NORMAL VECTOR $\vec{n} = \vec{u} \times \vec{v}$ and then got LEVEL SET EQN $(\vec{x} - \vec{x}_0) \cdot \vec{n} = 0$ where $\vec{x}_0 = \vec{P}$. This is not what I asked for.

(b) Find a parametric equation for the line through the point $(0, 1, 2)$ that is parallel to the plane $x + y + z = 2$ and perpendicular to the line $x = 1 + t, y = 1 - t, z = 2t$.



GOAL
To Find parametric equation $\vec{r}(t) = \vec{r}_0 + t\vec{v}$ for the line L

NOTE L_1 is NOT perpendicular to plane!

$$\vec{r}_0 = P = (0, 1, 2)$$

Since the line L is parallel to plane, the vector \vec{v} is parallel to a vector that lies in the plane and so must be ~~not~~ perpendicular to the normal vector

$\vec{n} = (1, 1, 1)$ to the plane. Since L is perpendicular to L_1 , \vec{v} and \vec{w} are perpendicular. So choose $\vec{v} = \vec{n} \times \vec{w} = \begin{vmatrix} \vec{i} & \vec{j} & \vec{k} \\ 1 & 1 & 1 \\ 1 & -1 & 2 \end{vmatrix}$

So $\vec{r}(t) = (0, 1, 2) + t(3, -1, -2)$

(3) [18 pts] Consider the quadric surface

$$x^2 + \left(\frac{y}{2}\right)^2 - \left(\frac{z}{3}\right)^2 = -1.$$

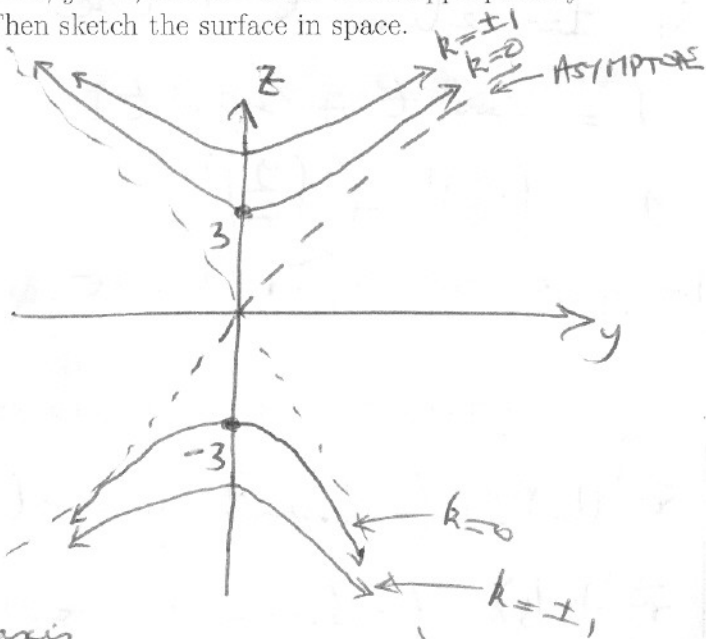
Find equations for the traces of this surface in the planes $x = k$, $y = k$, and $z = k$ for a few appropriately chosen values of k . Sketch each of these traces in a plane. Then sketch the surface in space.

$x = k$ $\left(\frac{z}{3}\right)^2 - \left(\frac{y}{2}\right)^2 = \underbrace{1 + k^2}_{\text{POSITIVE}}$

Asymptotes are at $\left(\frac{z}{3}\right)^2 - \left(\frac{y}{2}\right)^2 = 0$

or $z = \pm \frac{3}{2}y$.

When $k=0$ have points $(0, \pm 3)$
 For larger k , traces ~~intersect~~ ^{INTERSECT} ~~at~~ ^{at} z axis further from origin

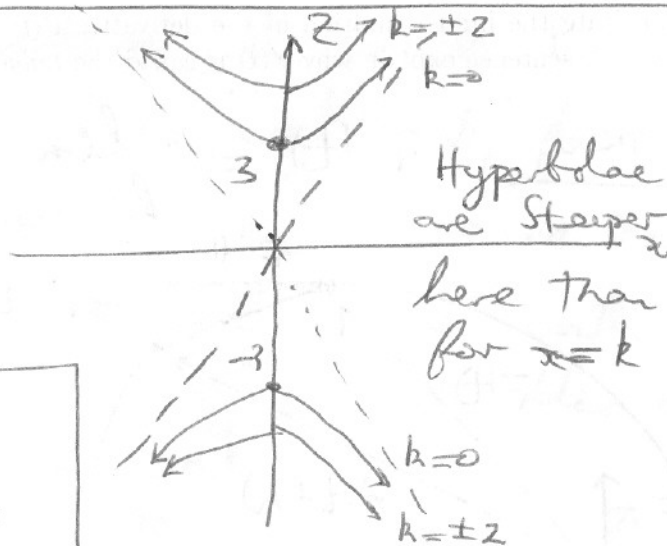


$y = k$ SIMILAR to $x = k$ but

$$\left(\frac{z}{3}\right)^2 - x^2 = 1 + \left(\frac{k}{2}\right)^2$$

Asymptotes at $z = \pm 3x$

When $k=0$ have $(0, \pm 3)$



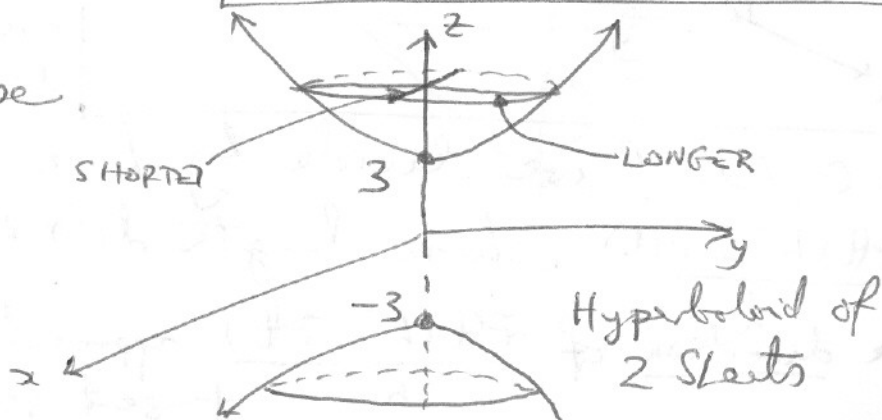
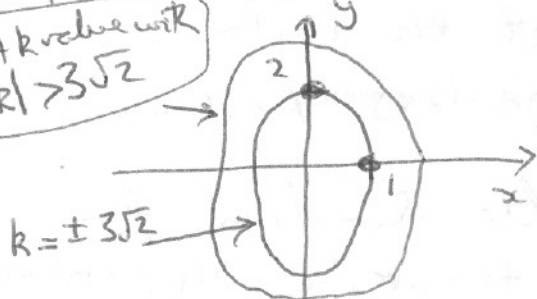
$z = k$ $x^2 + \left(\frac{y}{2}\right)^2 = \left(\frac{k}{3}\right)^2 - 1$

IF $|k| < 3$ NO trace as $\left(\frac{k}{3}\right)^2 - 1 < 0$

IF $k = 3$ Trace is origin

IF $|k| > 3$ Trace is ellipse.

A k value with $|k| > 3\sqrt{2}$



(4) [15 pts]

(a) Sketch the image in the xy -plane of the parametrized curve $\mathbf{r}(t) = (3 \cos t, 4 \sin t)$, where $0 \leq t \leq \pi$.

$$x = 3 \cos t, \quad y = 4 \sin t$$

So to eliminate t use

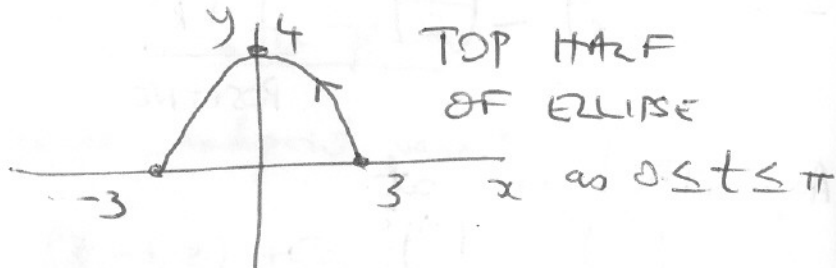
$$1 = \cos^2 t + \sin^2 t$$

$$1 = \left(\frac{x}{3}\right)^2 + \left(\frac{y}{4}\right)^2$$

Image curve is an ELLIPSE.

$$\vec{r}(0) = (3, 0), \quad \vec{r}\left(\frac{\pi}{2}\right) = (0, 4)$$

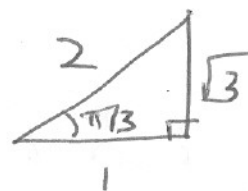
$$\vec{r}(\pi) = (0, -3)$$



(b) Calculate $\mathbf{r}'(\pi/3)$, where \mathbf{r} is the parametrized curve in (a).

$$\vec{r}'(t) = (-3 \sin t, 4 \cos t)$$

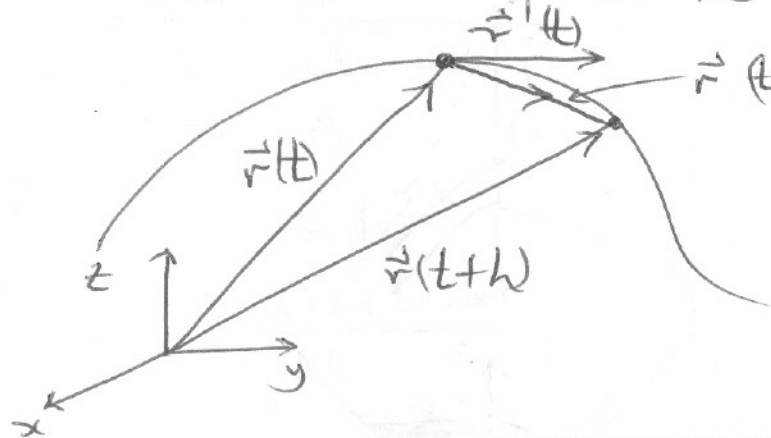
$$\vec{r}'\left(\frac{\pi}{3}\right) = \left(-3 \sin \frac{\pi}{3}, 4 \cos \frac{\pi}{3}\right) = \left(-\frac{3\sqrt{3}}{2}, 2\right)$$



(c) State the limit definition of the derivative $\mathbf{r}'(t)$ of a parametrized curve \mathbf{r} . Using a picture and an English sentence explain why $\mathbf{r}'(t)$ is called the *tangent vector* to the curve at $\mathbf{r}(t)$.

DEFINITION

$$\vec{r}'(t) = \lim_{h \rightarrow 0} \frac{\vec{r}(t+h) - \vec{r}(t)}{h}$$



Since $\vec{r}(t+h)$ and $\vec{r}(t)$ are vectors

$\vec{r}(t+h) - \vec{r}(t)$ is also a vector.

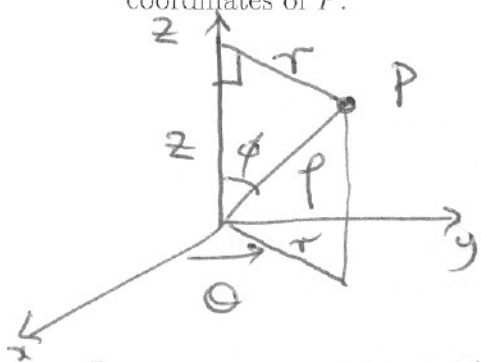
From the picture we see this is a SECANT vector to curve. As $h \rightarrow 0$ the length of the secant goes

to 0 but if we divide by h we get the vector $\frac{\vec{r}(t+h) - \vec{r}(t)}{h}$ whose length does not go to 0. As $h \rightarrow 0$

the direction of $\frac{\vec{r}(t+h) - \vec{r}(t)}{h}$ approaches the direction of a tangent vector to curve. So $\vec{r}'(t)$ is TANGENT

(5) [12 pts]

(a) Suppose the spherical coordinates of a point P are $(\rho, \theta, \phi) = (4, \pi/6, \pi/3)$. Find the cylindrical coordinates of P .



Extract the right triangle



from picture on left

$$So \quad z = \rho \cos \phi, \quad r = \rho \sin \phi.$$

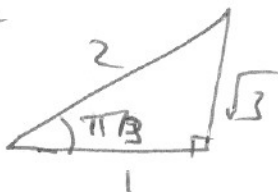
Cylindrical coords of P are (r, θ, z) with

$$r = \rho \sin \phi = 4 \sin \pi/3 = 2\sqrt{3}$$

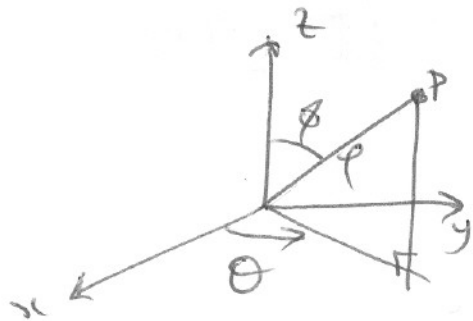
$$\theta = \theta = \pi/6$$

$$z = \rho \cos \phi = 4 \cos \pi/3 = 2$$

$$(r, \theta, z) = (2\sqrt{3}, \pi/6, 2)$$

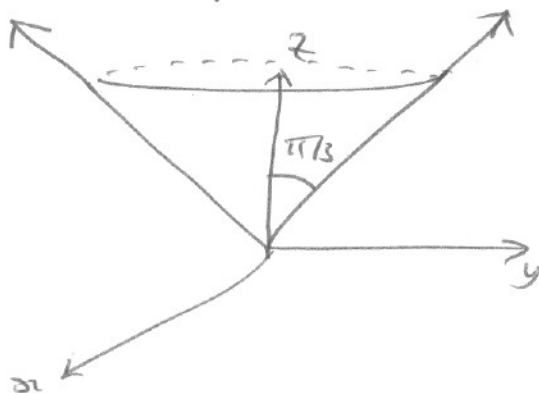


(b) Sketch and describe in words the surface whose equation in spherical coordinates is $\phi = \pi/3$.



The set of all points P whose drop angle, ϕ , from the positive z -axis is $\phi = \pi/3$

is an up-facing cone with vertex at the origin. (On this cone ρ and θ can take on any value)



Pledge: I have neither given nor received aid on this exam

Signature: _____